


SEPTEMBER

MATH JOURNAL

SPIRAL REVIEW – MORNING WORK - MATH CENTER

pencil to have. How many pencils does Amber have altogether?

PROVE IT!



SOLVE IT! $5 + 1$

Today is: September 5, 2019

JUST FLIP IT!


Read the first flip flop equation. Write the flipped equation on the back. Write the sum on each flip flop.

1 $1 + 5 = 6$

2 $5 + 4 = 9$

$4 + 5 = 9$

Alisha's
SEPTEMBER MATH JOURNAL



LET'S REMEMBER! Practice writing September. Trace it first, then write it.



September September

Today is: September 9, 2019

I SEE DOUBLE!

Add the numbers on the dice. Write the sum.

$1 + 1 = 2$



Alisha's
SEPTEMBER
MATH JOURNAL



Today is: September 5, 2019
JUST FLIP IT!

Read the first flip flop equation. Write the flipped equation on the bottom flip. Write the sum on each flip flop.

1 	2
3 	4

Today is: September 6, 2019
WHAT IS MISSING?

Draw in the number of dots needed to make ten. Then, fill in the missing number.

1 4 + <u>6</u> = 10	2 3 + <u>7</u> = 10
3 6 + <u>4</u> = 10	4 7 + <u>3</u> = 10

Today is: September 12, 2019
TIME FOR NUMBER

Create different number sentences that equal 5. Color the cubes to match the number.

	<u>3</u> + <u>2</u> = 5
	<u>1</u> + <u>4</u> = 5
	<u>4</u> + <u>1</u> = 5
	<u>2</u> + <u>3</u> = 5

Today is: September 9, 2019
I SEE DOUBLES!

Add the numbers on the dice. Write the sum.

	= 2		=
	= 4		=
	= 6		=

Alisha's
SEPTEMBER MATH JOURNAL



SEPTEMBER! Practice writing September. Trace it first, then write it.

September

Today is: September 10, 2019
ADDING TO TEN

Write the matching number sentence and color the dots to reach 10.

	<u>5</u> + <u>5</u> = 10	How many...
	<u>7</u> + <u>3</u> = 10	
	<u>1</u> + <u>9</u> = 10	
	<u>10</u> + <u>0</u> = 10	
	<u>4</u> + <u>6</u> = 10	

MISSING TOOTH GRINS!

Color the greater number in each pair.

6	OR	2
5	OR	7

SOLVE IT!

5 + 1 =

LET'S REMEMBER! Color the greater number in each pair.

SKILLS INCLUDED:

- ✓ Counting
- ✓ Practice writing numbers 1-20
 - ✓ Adding Plus 1
 - ✓ Addition to 5
 - ✓ Addition to 10
 - ✓ Missing Addends of 5
 - ✓ Missing Addends of 10
 - ✓ Adding partners with dice
 - ✓ Doubles
 - ✓ Doubles plus 1
- ✓ Properties of Operations (ex. if $8+2=10$, then $2+8=10$)
 - ✓ Word problems with sums up to 10
 - ✓ Number partners


'S SEPTEMBER MATH JOURNAL



Today is
LE

Amber has 5 pencils in her desk. Mary gives her 1 more pencil to have. How many pencils does Amber have altogether?

PROVE IT!



SOLVE IT!

$$\underline{\quad} + \underline{\quad} = \underline{\quad}$$

LET'S REMEMBER!

nine

Practice writing nine. Trace it first, then write it.

ND THE PARTNERS

ow, list the partners for the number. Then, flip the partners.

Partners of **3**

Now, flip it!

$$\begin{array}{c} \square + \square \\ \square + \square \end{array}$$

Practice writing three. Write it first, then write it.

LET'S REMEMBER!



Add the sums of the dice. Color in the dice with the smaller number.



ADDING TO TEN

Draw dots to reach 10. Write the matching number sentence and write how many dots you added.

$$\square + \square = 10$$

$$\square + \square = 10$$

$$\square + \square = 10$$



WHAT'S MISSING?

Draw the number of dots needed to make the total shown. Then, fill in the number.

How many did you add?

$$\begin{array}{|c|c|c|c|} \hline \bullet & \bullet & \bullet & \bullet \\ \hline \end{array} 5 + \underline{\quad} = 10$$



$$\begin{array}{|c|c|c|c|} \hline \bullet & \bullet & \bullet & \bullet \\ \hline \end{array} 5 + \underline{\quad} = 8$$



$$\begin{array}{|c|c|c|c|} \hline \bullet & \bullet & \bullet & \bullet \\ \hline \end{array} 5 + \underline{\quad} = 7$$



$$\begin{array}{|c|c|c|c|} \hline \bullet & \bullet & \bullet & \bullet \\ \hline \end{array} 5 + \underline{\quad} = 9$$



Today is:

GIVE ME TEN!

Fill in the missing number in each equation.

$$4 + \square = 10$$

$$8 + \square = 10$$

$$\square + \square = 10$$

$$6 + \square = 10$$

$$\square + \square = 10$$

$$2 + \square = 10$$

REMEMBER! Color the greater number.

41



33

OR

22

Today is:

TIME FOR NUMBERS

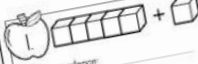
Trace the numbers 1-100 below.

3	4	5	6	7	8	9	10
13	14	15	16	17	18	19	20
23	24	25	26	27	28	29	30
34	35	36	37	38	39	40	
44	45	46	47	48	49	50	
54	55	56	57	58	59	60	
65	66	67	68	69	70		

Today is:

TEN APPLES UP ON TOP

Below, count the cubes. Draw a picture to help you. Write the number sentence in the space below the cubes. Write the total number in the apple.



Number sentence:



TOTAL



Number sentence:



TOTAL



Number sentence:



TOTAL

