

MATH JOURNALS FOR THE YEAR

ALIGNED TO THE CCSS

Alisha's SEPTEMBER MATH JOURNAL

September 9, 2019
I SEE DOUBLES
Add the numbers on the dice. Write the sum.

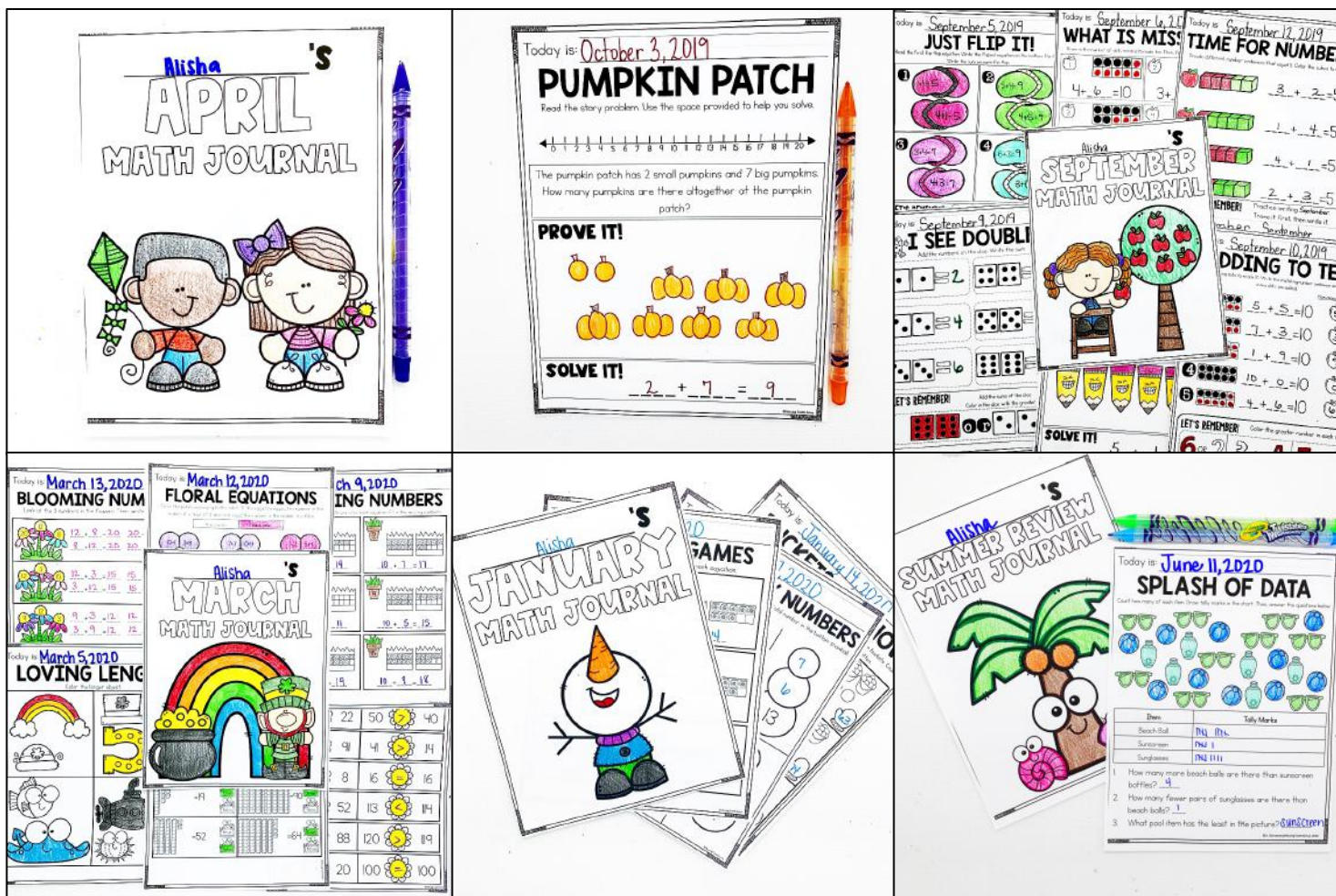
September 10, 2019
ADDING TO TEN
Use the ten frame to reach 10. Write the matching number sentence and how many dots you added.

Math activities shown include:
- Heart-shaped equations: $4+1=5$, $4+5=9$, $3+4=7$, $4+3=7$, $6+3=9$, $3+1=4$
- Ten frames: $9+6=10$, $3+4=7$
- Number sentences: $5+2=5$, $1+4=5$, $4+1=5$, $2+3=5$
- Dice addition: $2+2=4$, $2+2=4$

CREATED BY: ALISHA GIARRATANA, MISSING TOOTH GRINS

WHY SPIRAL MATH?

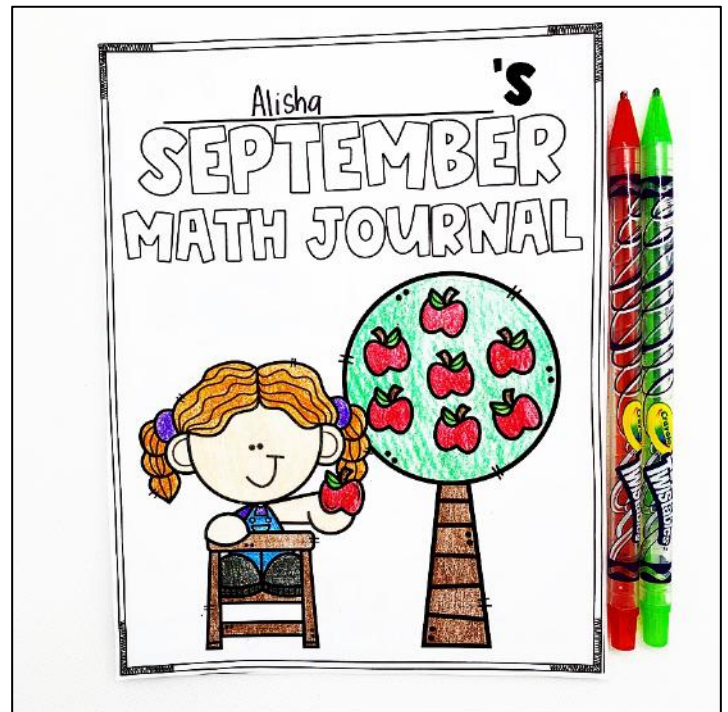
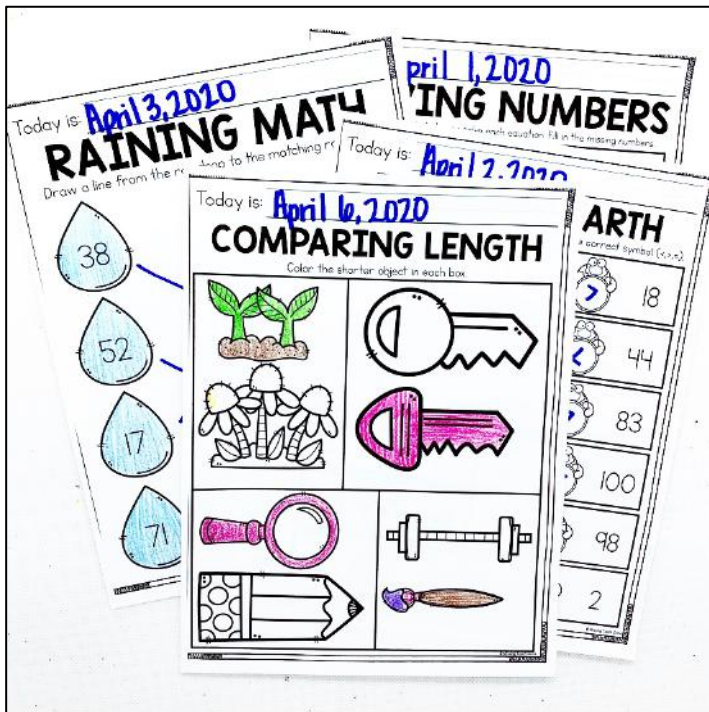
Spiraling math content is really important for our students. When we constantly review and revisit the math standards, students will continue to be exposed and therefore, retain information. They will grow more confident in their math skills, as well as be given more opportunities to build mastery and independence.



SKILLS INCLUDED:

The journals are aligned to the CCSS. In the 11 journals included in this bundle, you will find the following skills:

Counting, addition word problems, subtraction word problems, addition facts, subtraction facts, 2D shapes, 3D shapes, greater than/less than, telling time to hour and half hour, graphing, measurement, fractions, ten more/ten less, one more/one less, fact families, doubles, doubles plus one, number partners, number bonds, ten frames, properties of operations, missing addends, writing numbers, adding three numbers, and more!



Today is: **EASTER EGG HUNT**
Count the objects below. Fill in the graph.

1. How many are there of each?
2. Color the one with the most.
3. Color the one with the least.
4. How many more _____ are there than _____?

Today is: **TEN LITTLE ACORNS**
Draw the number of dots needed to make ten in the ten frame. Then, complete the equation.

___ + ___ = 10 ___ + ___ = 10 ___ + ___ = 10

___ + ___ = 10 ___ + ___ = 10 ___ + ___ = 10

Today is: **FILL IN NUMBERS**
Fill in the missing numbers below.

	3		8	
11				40
51				
		95		79
	103			
			16	

Today is: **GINGERBREAD TENS**
Count the tens. Write the number in the gingerbread house.

Today is: **SNOWBALL SPLAT**
Draw a line to match the numeral to the word form.

12	fifty	13	ninety
9	eleven	40	thirteen
20	nine	90	twelve
50	twenty	8	eight
11	twelve	2	forty

Today is: **DOMINO EFFECT**
Draw dots to make ten total.

Today is: **LET'S HUNT NUMBERS**
Make three different ways to make 6.

Today is: **BREAK IT DOWN**
After reading the number, fill in each box appropriately.

Word Form: _____ Draw Base Ten: _____

Tens and Ones: **49** Tally Marks: _____

Today is: **ALL ABOUT TRIANGLES**
Fill out the information below about triangles.

Triangles have...
_____ sides
_____ vertices

Today is: **POLAR PAIR UP**
Draw lines to match the base ten blocks to the number and word form.

42	_____	Twenty-two
29	_____	Twenty-nine

350+ PAGES

If 7+3=10 Then 10-3=___
If 4+7=11 Then 11-7=___
If 9+1=10 Then 10-1=___
If 2+7=9 Then 9-7=___
If 3+4=7 Then 7-4=___
If 5+7=12 Then 12-7=___
If 2+3=5 Then 5-3=___

Use the time and draw to solve the following equation.

67+18=

Prove It: _____

Explain your thinking: _____

Use paper clips to measure the length of each object.

Count the objects below. Fill in the graph.

Today is: **COUNTING ON**
Draw more to count on. Then, write the sum.

3+2=____ 5+5=____
1+3=____ 7+2=____
8+2=____ 4+4=____

Today is: **MISSING PRESENTS**
Fill in the missing number.

1+□=10 0+□=5
3+□=7 9+□=14
5+□=11 7+□=14
2+□=8 6+□=12
8+□=13 5+□=14
10+□=2 4+□=8

Today is: **MISSING ADDENDS**
Solve the equations below.

6+____=12 4+____=10 8+____=14
9+____=10 1+____=3 5+____=12
3+____=6 9+____=10 2+____=5
7+____=9 0+____=4 4+____=9
6+____=8 5+____=8 1+____=4
3+____=10 4+____=7 8+____=15
9+____=18 7+____=14 3+____=13
5+____=14 8+____=16 2+____=10

Today is: **STRAWBERRY BONDS**
Fill in the missing numbers to complete the number bonds.

Today is: **SNOWMAN FAMILIES**
Look at the 3 numbers in the snowman. Then, write the fact families.

13	_____	8	_____
7	_____	12	_____
6	_____	4	_____
14	_____	6	_____
7	_____	9	_____
7	_____	5	_____
5	_____	6	_____
12	_____	4	_____
7	_____	10	_____

SPIRAL MATH REVIEW

HOW TO MAKE IT WORK IN YOUR
CLASSROOM



ALISHA GIARRATANA - MISSING TOOTH GRINS